

Name .....

Roll No .....

Ch- Pattern

Class .....

Sec .....

1. Discover the pattern and write the next four terms.

(a) ABC CBA DEF FED

(b) 18 20 22 24

(c) 46 44 42 40

(d) 9 15 21 27


(e) 30 27 24 21


(f) 15 25 35 45


(g) 11A 13B 15C 17D


(h) 7 14 21 28

2. Study each pattern and continue the sequence by drawing.


(a)  \_\_\_\_\_, \_\_\_\_\_, \_\_\_\_\_, \_\_\_\_\_

(b)  \_\_\_\_\_, \_\_\_\_\_, \_\_\_\_\_, \_\_\_\_\_

(c)  \_\_\_\_\_, \_\_\_\_\_, \_\_\_\_\_, \_\_\_\_\_

(d)  \_\_\_\_\_, \_\_\_\_\_, \_\_\_\_\_, \_\_\_\_\_

3. Find the pattern in each and complete it.



(c) 0, 2, 4, 6, \_\_\_\_\_, \_\_\_\_\_, \_\_\_\_\_, \_\_\_\_\_

(d) 24, 22, 20, 18, \_\_\_\_\_, \_\_\_\_\_, \_\_\_\_\_, \_\_\_\_\_