

Name: _____ DR. M.K.K ARYA MODEL SEN. SEC. SCHOOL Sec: _____

Mock Test for Annual Exams 2018-19

Time: _____ E.V.S. Class II M.M.60

Ques1. Match the following: - (4 Marks)

I. Jana-Gana-Mana	Sources of water	(_____)
II. Water transport	Bihu, Lohri	(_____)
III. 24 spokes	Sandy and dry	(_____)
IV. Harvest festival	Moving air	(_____)
V. Desert	Leaves fall	(_____)
VI. Wind	Ship, boat	(_____)
VII. Autumn	Chakra	(_____)
VIII. Streams and ponds	National Anthem	(_____)

Ques2. Fill in blanks with the correct option given:- (4 marks)

animals, 2nd October, telephone, rivers, fuel, seasons, symbol, cardinal

- I. Vehicles such as cars and scooter need _____ to move.
- II. When it rains, water gets collected in _____ and other water bodies.
- III. We eat different food items, wear different clothes and do different activities during different _____.
- IV. The main directions are also known as the _____ directions.
- V. Fax machines are connected through a _____ line.
- VI. Every country has its national _____.
- VII. We celebrate Gandhi Jayanti on _____.
- VIII. We share our Earth with plants and _____.

Ques3. Write TRUE or FALSE for the following: - (4 Marks)

- I. Seasons may change even during the same day. _____
- II. Birds build their nest during spring season. _____
- III. The water in seas and oceans is sweet. _____
- IV. The earth is the only planet that has water and life on it. _____
- V. Wells are the main source of water on earth. _____
- VI. Harvest is the time when crops ripen. _____
- VII. Cycles and Rickshaws need fuel to move. _____
- VIII. The sun sets in the east. _____

Ques4. Tick the correct option and write in the blank given: - (3 Marks)

- I. _____ transport is the fastest and the most expensive mode of transport.

- a. Air b. Land c. Water (_____)
- II. We can watch and hear program on _____.
- a. Television b. Newspaper c. Magazine (_____)
- III. A _____ helps us to know the directions.
- a. Compass b. Scarecrow c. Cardinal (_____)
- IV. Vande Matram is our national _____.
- a. Spokes b. Anthem c. Song (_____)
- V. Lohri is the harvest festival of _____.
- a. Kerala b. Delhi c. Punjab (_____)
- VI. _____ is a gas that pollutes the air and mainly released by cars and vehicles.
- a. oxygen b. Carbon dioxide c. Carbon monoxide (_____)

Ques5. Name the following: - (8 Marks)

- I. Two fuels used by vehicles- _____ , _____
- II. Two human powered vehicle- _____ , _____
- III. Two means of communication- _____ , _____
- IV. Two human powered vehicle- _____ , _____
- V. Two sources of water- _____ , _____
- VI. V-shaped area between hills and mountains - _____
- VII. The main sources of water- _____ , _____
- VIII. Two activities for which we need water- _____ , _____

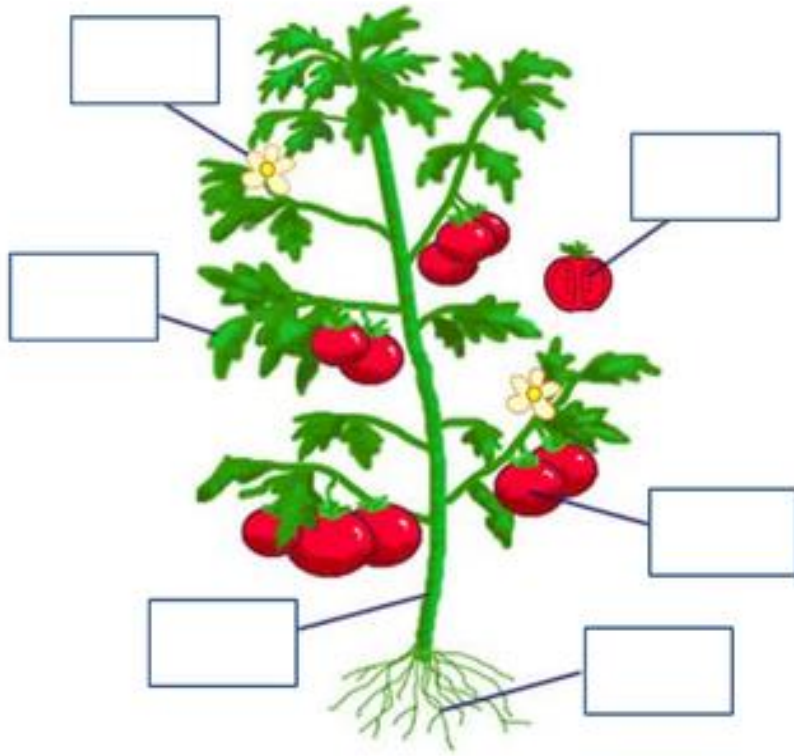
Ques6. Answer the following questions in one or two line: - (10 Marks)

- A. What are three modes of transportation?
- B. Write some means of communication?
- C. What are cardinal directions?
- D. What are the different kinds of land found on earth's surface?
- E. Name the five seasons of India.

Ques7. Answer the following questions briefly: - (12 Marks)

- A. What are Harvest festivals? Name two harvest festivals celebrated in India?
- B. Where can we find water on Earth's surface?
- C. How is water useful to plants, animals and human beings?
- D. What is the difference between winter season and summer season?


Ques8. Label the Parts of plant. (5 Marks)




Ques9. Identify the following pictures: -

(5 Marks)









d.



e.

Q10. Locate and label the following on the given map.

- A. Largest state
- B. Capital of India
- C. State of Bollywood

OR

- A. 3 Oceans
 - i. Arabian sea
 - ii. Indian Ocean
 - iii. Bay of Bengal

