

Q1. Fill in the blanks:

4

- The units used to measure the length of a football ground \_\_\_\_\_
- $42 \times \underline{\quad} = 0$
- $12 \times \underline{\quad} = 108$
- Which is the bigger unit; km or m?
- State the type of fraction  $\frac{4}{3}$  \_\_\_\_\_
- Rs.  $12 \div 3 = \underline{\quad}$
- $\underline{\quad} \times 1 = 123$
- Circle the unit fraction:  $\frac{13}{15}, \frac{1}{15}$

Q2. Find the product of the following:

4

- $3249 \times 16$
- $1045 \times 23$

Q3. Solve the following fractions:

4

- $\frac{23}{14} - \frac{6}{14}$
- $\frac{8}{24} + \frac{10}{24}$
- $\frac{40}{15} - \frac{11}{15}$
- $\frac{116}{172} + \frac{128}{172}$

Q4. Convert the following:

6

- 2476 m into km
- 3L 405 mL into mL
- 16 kg 240 g into g
- 23 m 79 cm into cm
- 425 p into rupees
- 30 rupees 65 paise into paise

Q5. Add the following:

4

- 65 km 208 m and 19 km 435 m

b. 127 L 55 mL and 35 L 290 mL

Q6. Subtract the following: 4

a. 65 m 89 cm from 802 m 10 cm

b. 10 kg 923 g from 16 kg 810 g

Q7. Solve the following: 6

a. Subtract Rs. 39.17 from Rs. 85.06

b. Rs. 66.95 X 4

c. Rs. 55.60 ÷ 5

Q8. Write in words: 4

a. Rs. 40.08

b. Rs. 12.50

c.  $\frac{3}{14}$

d.  $\frac{23}{80}$

Q11. Anjali bought a pair of socks for Rs. 30.25, a pencil for Rs. 3.55, a book for Rs.45.35 and a notebook for Rs. 15.25. How much did she spend altogether? 2

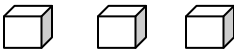
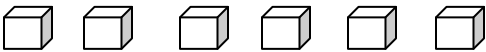
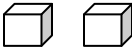

Q12. A barrel contained 116L oil. 84L of oil were used up. How many litres of oil were there in the barrel now? 2


Q13. The weight of an empty jar is 236g. Mrs. Shah put 843g of cookies into the jar. Find the total weight of the jar with cookies in kilogram and gram. 2

Q14. If 1 brick of Ice cream costs Rs. 75.28, find the cost of 3 such bricks. 2

Q15 Mrs. Sharma bought 65m of cloth. She used 34m 20cm of cloth to make dresses in the boutique. How many metres of cloth were left? 2

Q16. Read the pictograph and answer the following questions: 4

NAME	NUMBER OF GIFTS
STEVEN	
GLORIA	
ANDREW	
JESSICA	

1  = 2 gifts

- Who got the most number of gifts?
- Who got more gifts, Jessica or Steven?
- Who got six gifts?
- How many gifts did Andrew get?

Q17. Mr. John bought the following from Venus stores on 20.10.94:

3

(i) 2 lamps costing Rs. 951.25 each

(ii) 1 bike costing Rs.800

(iii) 4 seat covers of Rs.19.20 per seat cover.

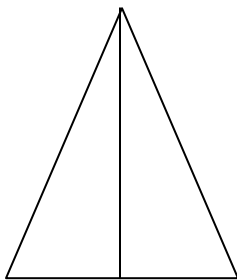
Prepare the bill for the above purchase.

Q18. Prepare the tally marks for the liking of students for different colours in the given table: 4

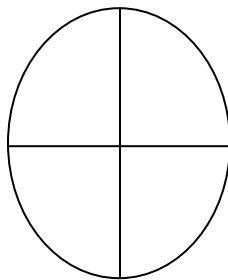
Colour	Red	Blue	Green	Purple	Yellow
No. of students	14	10	7	17	20

Q19. Colour the figure for the given fraction:

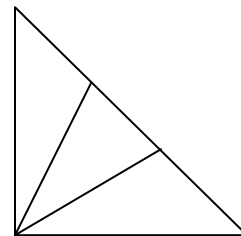
3



$\frac{1}{2}$



$\frac{2}{4}$



$\frac{2}{3}$