

WORKSHEET

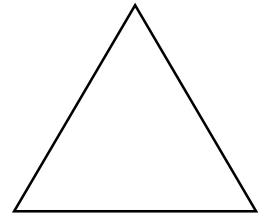


Name _____

CLASS 2 (MATHS)

Roll No. _____

SHAPES

Q1. Name the shapes :



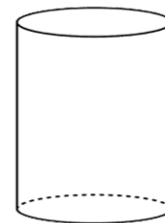
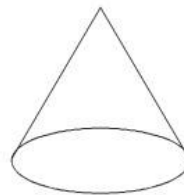
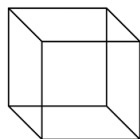

Q2. Fill in the blank:

1. Square has _____ sides and _____ corners.
2. _____ sides of a rectangle are equal.
3. _____ has 3 sides.
4. Circle has _____ sides and _____ corners.
5. All sides of a square are _____.

Q3. Give example of the following:

1. Cuboid _____
2. Cube _____
3. Sphere _____
4. Cylinder _____
5. Cone _____

Q4. Name the following shapes:



Q5. Fill in the blanks:

1. A cube has _____ faces, _____ edges and _____ vertices.
2. A _____ has 2 flat faces and 1 curved face.
3. A cone has 1 _____ face and _____ curved face.
4. _____ has no edge and no vertex.
5. All the faces of a cube are _____ and _____.
6. _____ faces of a cuboid are equal and rectangular