

Dr. M.K.K. Arya Model School, Model Town, Panipat.

Mock Test

Name _____

Subject- Maths

Roll No. _____

Class – I

M.M. 60

Q 1. Write the missing numbers:

(3)

- | | | | | |
|-------|-------|-------|-------|----|
| a. 10 | 11 | _____ | _____ | 14 |
| b. 36 | _____ | 38 | _____ | 40 |
| c. 41 | _____ | 43 | _____ | 45 |

Q 2. What number comes before the given number:

(2)

- | | | | |
|----------|----|----------|----|
| a. _____ | 23 | b. _____ | 50 |
| c. _____ | 48 | d. _____ | 33 |

Q 3. Add the following:

(4)

a.) T O

$$\begin{array}{r} 34 \\ + 12 \\ \hline \\ \hline \end{array}$$

b.) T O

$$\begin{array}{r} 56 \\ + 10 \\ \hline \\ \hline \end{array}$$

c.) T O

$$\begin{array}{r} 42 \\ + 25 \\ \hline \\ \hline \end{array}$$

d.) T O

$$\begin{array}{r} 25 \\ + 64 \\ \hline \\ \hline \end{array}$$

Q 4. What number comes in between:

(3)

- | | |
|----------------|----------------|
| a. 25 _____ 27 | b. 14 _____ 16 |
| c. 30 _____ 32 | d. 44 _____ 46 |
| e. 16 _____ 18 | d. 37 _____ 39 |

Q 5. Write number names: -

(6)

- | | |
|-------------|-------------|
| a. 8 _____ | b. 20 _____ |
| c. 27 _____ | d. 37 _____ |
| e. 43 _____ | f. 45 _____ |

Q 6. Subtract the following: -

(4)

a.) T O

4 3

-3 3

b.) T O

3 8

-1 2

c.) T O

3 2

-1 1

d.) T O

3 7

-1 7

Q 7. Word Problems: -

(8)

a.) There were 10 apples in a box.

3 apples were eaten.

How many apples are left in the box now?

1 0

- 3

b.) 8 children were playing.

7 more joined them.

How many children are there now?

8

+ 7

c.) Meena has 7 pens.

Riya has 3 pens.

Radha has 6 pens.

How many total pens are there in together?

7

+ 3

+ 6

d.) Rohan has 35 rupees in his piggy bank.

He spent 14 rupees.

Now he has _____ rupees.

3 5

- 1 4

Q 8. Put >, < or = in given boxes: -

(6)

a. 45 _____ 49

b. 20 _____ 18

c. 28 _____ 28

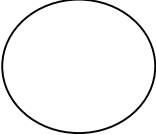

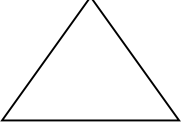

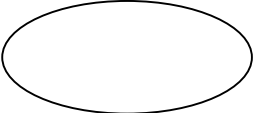
d. 38 _____ 40

e. 27 _____ 30

f. 46 _____ 44

Q 9. Name the shapes: -

(5)

1.  _____
2.  _____
3.  _____
4.  _____
5.  _____

Q 10. Write the given numbers in increasing order: -

(4)

- a.) 42, 25, 33, 40

- b.) 18, 12, 27, 30

- c.) 49, 43, ,27 38

- d.) 26, 33, 40, 22

Q 11. Circle and write the biggest number in the box: -

(4)

1.

18, 17, 23

--
2.

15, 21, 18

--
3.

25, 36, 48

--
4.

6, 9, 15

--

Q 12. Read and write the numbers in tens and ones:-

(3)

Number	Number Name	Tens	Ones
30	Thirty		
44	Forty Four		
27	Twenty Seven		
49	Forty Nine		
38	Thirty Eight		
25	Twenty Five		

Q 13. Match the numbers with their number names: -

(3)

24

Twenty Eight

33

Twenty Four

28

Thirty Three

Q 14. Write the numbers against their number names:-

(2)

1. Twenty _____
2. Thirty-One _____
3. Forty-Nine _____
4. Twenty-Seven _____

Q 15. Write the numbers in the boxes : -

(3)

1. 2 Tens and 5 Ones =
2. 3 Tens and 8 Ones =
3. 4 Tens and 3 Ones =
4. 3 Tens and 6 Ones =
5. 4 Tens and 7 Ones =
6. 2 Tens and 3 Ones =